

Cambridge
International
AS & A Level

Cambridge International Examinations
Cambridge International Advanced Subsidiary and Advanced Level

GEOGRAPHY

9696/03

Paper 3 Advanced Physical Geography Options

For Examination from 2018

SPECIMEN INSERT

1 hour 30 minutes

READ THESE INSTRUCTIONS FIRST

This Insert contains all the resources referred to in the questions.

This document consists of **5** printed pages and **1** blank page.

2

Photograph A for Question 1**A tropical limestone (tower karst) landscape**

Fig. 1 for Question 4

Fig. 1A undisturbed sediment cell

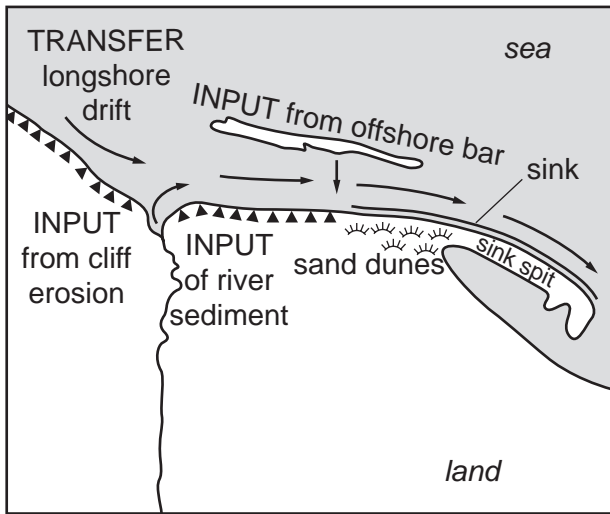
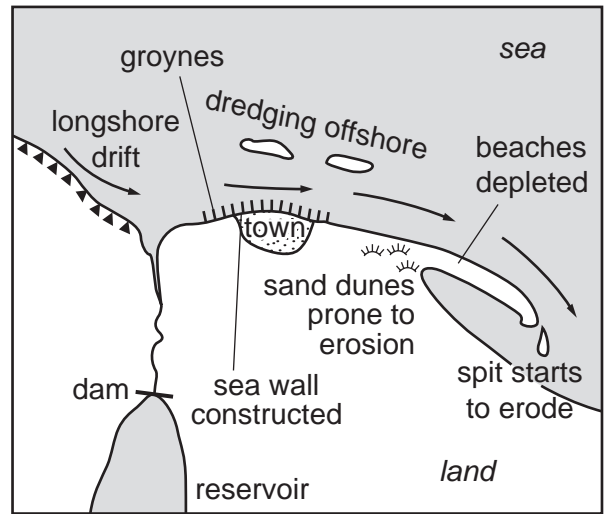


Fig. 1B sediment cell after disturbance



Key

- ▲▲▲▲ steep slope/cliffs
- ⎓ river
- ⋈⋈⋈ dunes

Fig. 2 for Question 7

Vertical drop and horizontal travel distance of two volcanic hazards

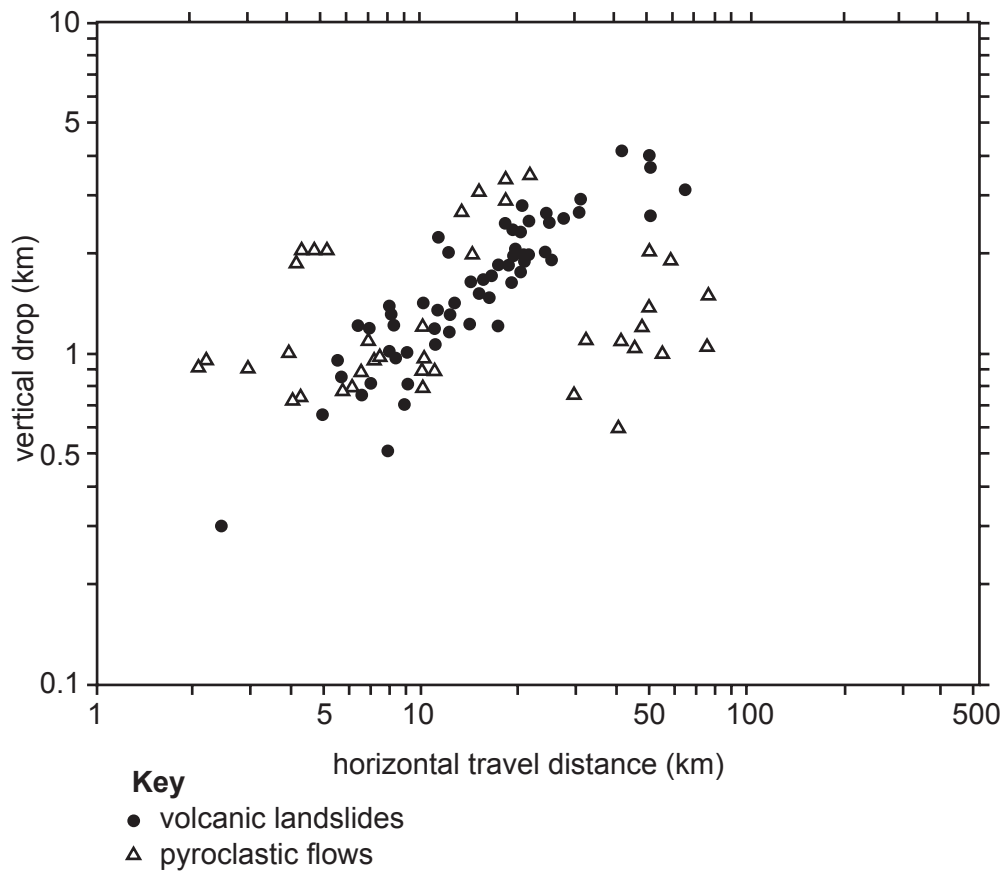
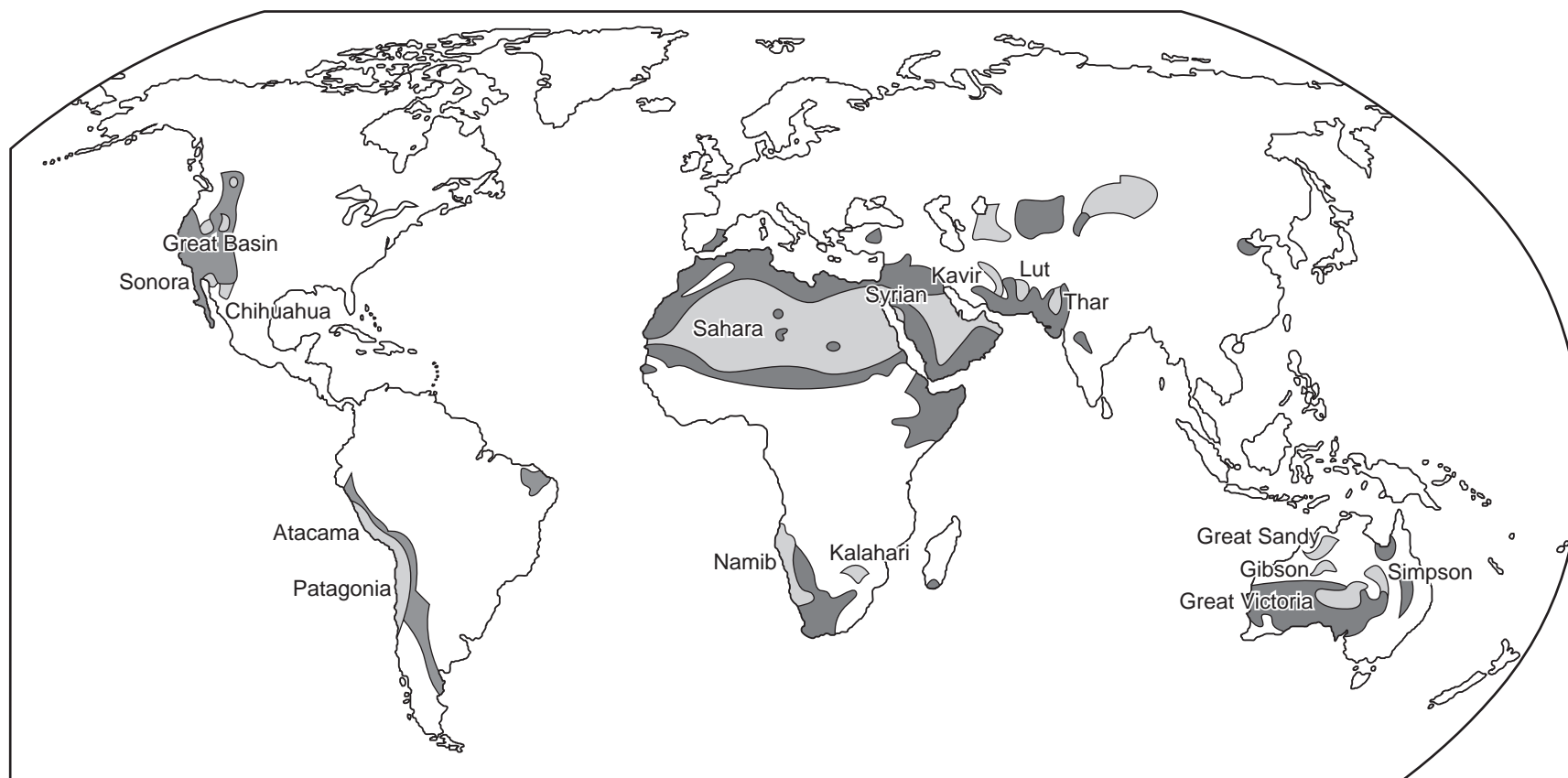


Fig. 3 for Question 10

Areas at high risk from desertification



Key

- existing deserts
- areas with high risk of desertification

BLANK PAGE

Copyright Acknowledgements:

Question 1 © www.fotogeographic.de/thema_kaust/images/tk_moon1a.jpg; 6 April 2011.

Question 7 © A J Gerrard; *Mountain Environments: An Examination of the Physical Geography of Mountains*; The MIT Press; 1990.

Permission to reproduce items where third-party owned material protected by copyright is included has been sought and cleared where possible. Every reasonable effort has been made by the publisher (UCLES) to trace copyright holders, but if any items requiring clearance have unwittingly been included, the publisher will be pleased to make amends at the earliest possible opportunity.

Cambridge International Examinations is part of the Cambridge Assessment Group. Cambridge Assessment is the brand name of University of Cambridge Local Examinations Syndicate (UCLES), which is itself a department of the University of Cambridge.